



**ARMY BURNHALL COLLEGE FOR GIRLS ABBOTTABAD**  
**ENTRANCE TEST- 2023**

CLASS: I \_\_\_\_\_  
TIME: 2 Hrs.

SUBJECT: MATH  
MAX MARKS: 50

Name \_\_\_\_\_

Q.No	1	2	3	4	5	6	7	8	Total
Max Marks	05	05	10	06	04	06	10	04	50
Marks Obt									
Examiner's Sign									

**Q.1: Fill in the blanks.** /05

- There are \_\_\_\_\_ days in a week.
- Monday is the \_\_\_\_\_ day of the week.
- Friday is a \_\_\_\_\_ day.
- March has \_\_\_\_\_ days.
- My date of birth is \_\_\_\_\_.

**Q.2: Fill in the missing numbers.** /05

32			35				39			42			
----	--	--	----	--	--	--	----	--	--	----	--	--	--

**Q.3: Write the numbers name.** /10

- 22 \_\_\_\_\_
- 10 \_\_\_\_\_
- 6 \_\_\_\_\_
- 15 \_\_\_\_\_
- 30 \_\_\_\_\_

**Q.4: Add the following.** /06

- |                  |                  |
|------------------|------------------|
| $13 + 4 =$ _____ | $22 + 2 =$ _____ |
| $8 + 6 =$ _____  | $12 + 1 =$ _____ |
| $18 + 1 =$ _____ | $14 + 5 =$ _____ |

**Q.5: What comes:** /04

- | before   | after    | between     |
|----------|----------|-------------|
| _____ 24 | 36 _____ | 12 _____ 14 |
| _____ 37 | 22 _____ | 24 _____ 26 |
| _____ 10 | 15 _____ |             |

**Q.6: Write ordinal numbers.**

**/06**

10<sup>th</sup> \_\_\_\_\_

3<sup>rd</sup> \_\_\_\_\_

2<sup>nd</sup> \_\_\_\_\_

4<sup>th</sup> \_\_\_\_\_

5<sup>th</sup> \_\_\_\_\_

7<sup>th</sup> \_\_\_\_\_


**Q.7: Write backward counting from 20 -- 0.**

**/10**

20										

**Q.8: Write the names of these shapes.**


**/4**



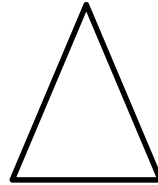
\_\_\_\_\_



\_\_\_\_\_



\_\_\_\_\_



\_\_\_\_\_